

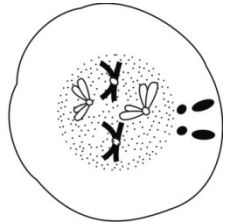
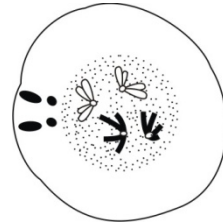
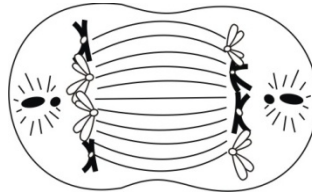
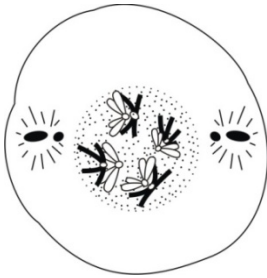
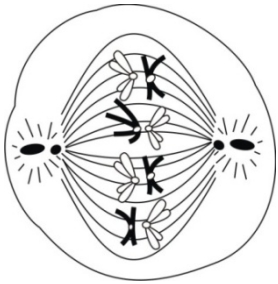
Name _____

Date _____

STAGES OF MEIOSIS

Label each phase correctly. Number the following diagrams in the proper order.

Choices: prophase I, metaphase I, anaphase I or telophase I



Label and number each phase correctly as prophase II, metaphase II, anaphase II, telophase II.

